




B

AMAZING RACE




Finish Point: You **DO NOT** need to finish by passing through Goroke Township in this Course. Your start at Goroke Township is calculated from the intersection of Natimuk-Francis Rd & Kiely St for route planning purposes.

1	Q: What is 'Lamb Supreme'?	10
2	Q: Find Me Picture (answer must be in UTM WGS 84)	 10
3	Q: Find the picture plate on the tree. (answer must be in UTM WGS 84)	10
4	Q: What is the number and suit of the playing card at this lookout point at 550730 / _ _ _ _ 114?	10
5	Q: At the PBS 2 site, what name is stamped into the bricks?	10
6	Q: Find Me Picture (answer must be in UTM WGS 84)	 10
7	Q: Fill the Gaps. _ _ P 8	10
I	Your first task card can be found at 558087 / 5925275 inside an old water tank. However, to get to this card you must follow these set of instructions. a) Use Horace Walters Rd b) 552081 / 5926777 Enter from the NNW and Exit to WSW c) 551718 / 5923227 Enter from the W and Exit E	

8	<p>Q: What is the outside measurement between the two poles (with white tops) in the State Park? Answer in cm +/- 5cm</p>	10
9	<p>Q: What is the depth of the bore? Answer in meters +/- 1 metre</p>	10
GC	<p><u>Are you greedy?</u> Here is a bonus course for extra points. You will find your greedy instructions by exciting 567142 / 5928313 SE onto the marked track. Eventually you will come across some blue surveyor tape. At this point look for the wooden box. All will be revealed once you open the box. Note: You must traverse back over your route to 567142 / 5928313 to carry on.</p> <p>The start of your Greedy Course is 574068 / 5933339 The finish is 574968 / 5935139 where you will re-join your course, there is no need to go back to your start to re-join your course.</p> <p>Please make sure you still follow all instructions for your route until you get to your start point of this course. There will be no questions missed if you decide to do the Greedy Course.</p>	??
10	<p>Q: At 568613 / 5929772 what is this site of?</p>	10
11	<p>Q: Look out for this monument, and answer the following question. At what date did Major Mitchell and Party camp near here?</p>	10
12	<p>Q: On G. Webbs Rd there is a large shed with numerous silos. On the left side of the shed is a silo with a name on it. What is the name? Note you will definitely need to use your binoculars and at no point should you enter the famer's property.</p>	10
13	<p>Q: What type of ducks have been sighted at Connans Swamp Game Reserve?</p>	10
14	<p>Q: Where is Sypotts Corner? WGS UTM</p>	10
15	<p>Q: What is the brand and model of the water meter?</p>	10
16	<p>Q: What is the discrepancy with this Bushland Reserve sign?</p>	10
17	<p>Q: What is the discrepancy with the Breens track sign?</p>	10



I	Your entry to one of the task cards is via a WP on a UMT. Enter and Exit that track at the same point.	
18	Q: What date does the ‘control program’ finish?	10
19	Q: Find Me Picture (answer must be in UTM WGS 84)	



COMPLETION TIME: 4.00pm
COURSE LENGTH: 127 km (not including Greedy Course)